




## ACTIVITY 24 - CAKE SALE



For the school cake sale, Nancy made 84 chocolate muffins. They were very popular and, after 20 minutes, there were only 13 left.

**How many had she sold?**

Start by drawing a bar to represent the muffins that Nancy had made. Then, divide the bar into sections to show what she had sold after 20 minutes and what was left. Can you see what calculation you need to do to work out the answer to the question?